




Name: _____

Monday

Math Practice: Understanding Fractions (3.NF.2)

Label the space (or interval) between 0 and 1 on the number lines.



Partition each open number line into equal parts.

Partition the open number line into 4 equal parts.

Label $\frac{2}{4}$ on the number line.



Partition the open number line into 8 equal parts.

Label $\frac{5}{8}$ on the number line.



Partition the open number line into 2 equal parts.

Label $\frac{1}{2}$ on the number line.



Partition the open number line into 6 equal parts.

Label $\frac{4}{6}$ on the number line.



Partition the open number line into 3 equal parts.

Label $\frac{2}{3}$ on the number line.



Solve using a number line.

You have a piece of string that you need to cut into 3 equal pieces. Draw a number line to show where you would cut the string. Label each piece to represent part of the whole piece of string.