

Name _____










































Money

Counting coins

A Busy Builder

Count the coins. Write.



| | | |
|--|--|--------|
| A.  |     | _____c |
| B.  |      | _____c |
| C.  |       | _____c |
| D.  |      | _____c |
| E.  |      | _____c |
| F.  |       | _____c |
| G.  |    | _____c |

Review: A shovel costs \$1.00. Draw coins (10¢, 20¢, 50¢, 100¢) to equal \$1.00.

©2005 by Pearson Education, Inc. All rights reserved.