





Name _____

Directions: Write how many tens and ones you see. Then write how many in all.

| | |
|---|--|
| <p>1.</p>  <p>___ tens ___ ones</p> <p>___ in all</p> | <p>2.</p>  <p>___ tens ___ ones</p> <p>___ in all</p> |
| <p>3.</p>  <p>___ tens ___ ones</p> <p>___ in all</p> | <p>4.</p>  <p>___ tens ___ ones</p> <p>___ in all</p> |