

Reading Analog Clocks (A)

Read each time and write it in the space under the clock.


1.




2.




3.




4.



5.




6.



7.




8.




9.



10.



11.



12.

