

## Reading Analog Clocks (A)

Read each time and write it in the space under the clock.

1.




\_\_\_\_\_

2.




\_\_\_\_\_

3.




\_\_\_\_\_

4.




\_\_\_\_\_

5.



\_\_\_\_\_

6.



\_\_\_\_\_

7.



\_\_\_\_\_

8.




\_\_\_\_\_

9.




\_\_\_\_\_

10.




\_\_\_\_\_

11.



\_\_\_\_\_

12.



\_\_\_\_\_