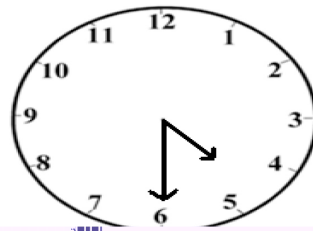
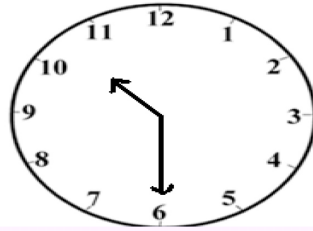
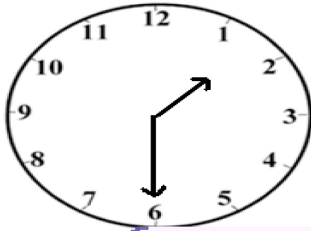


Student Name: _____

Score: _____

Write Time



...:30

$$5\sqrt{3} - 5\sqrt{3} + 4\sqrt{2} = \underline{\hspace{2cm}}$$

$$6\sqrt{5} - 2\sqrt{3} + 2\sqrt{5} = \underline{\hspace{2cm}}$$