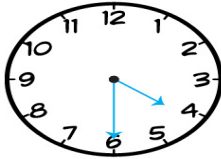


Name: _____ Date: _____

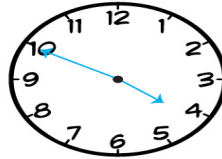
4th Grade

ELAPSED TIME WORKSHEETS

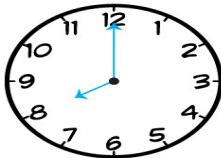
Work out the elapsed time between the times on the two clock.



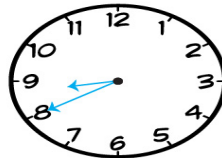
TO



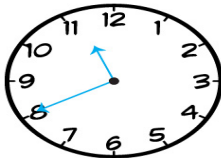
_____ minutes



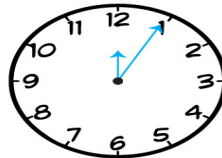
TO



_____ minutes



TO



_____ minutes

Draw lines to join up times that have an elapsed time of 30 minutes.

06:20

02:50

05:00

09:15

03:20

09:45

06:50

04:30