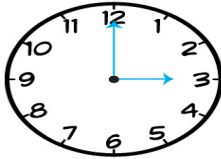


Name: _____ Date: _____

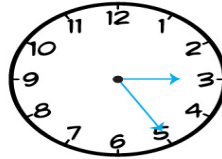
4th Grade

ELAPSED TIME WORKSHEETS

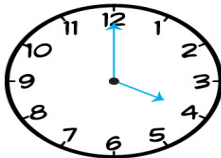
Work out the elapsed time between the times on the two clock.



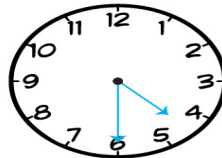
TO



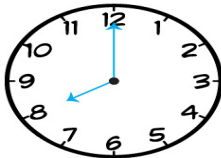
_____ minutes



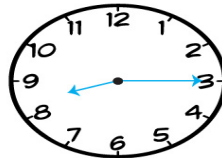
TO



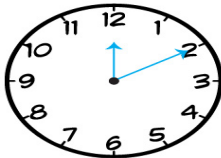
_____ minutes



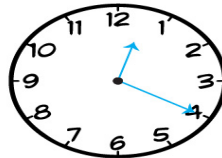
TO



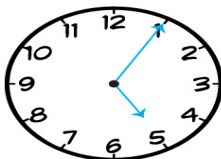
_____ minutes



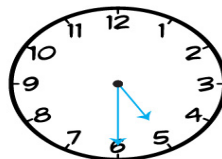
TO



_____ minutes



TO



_____ minutes