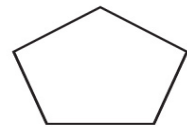
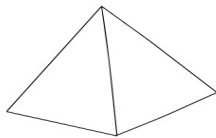
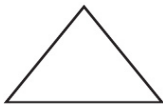
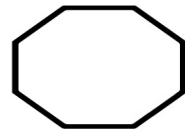
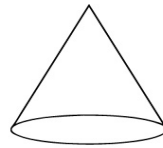
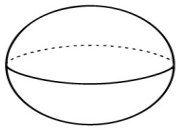


Name: _____ Date: _____

3rd Grade
MATH WORKSHEETS
GEOMETRY

Name that 2D or 3D shape.



prism

pyramid

triangle

pentagon

cone

octagon

rectangle

sphere