




Name: \_\_\_\_\_


Can you tell the time to the nearest 5 minutes?

(Worksheet 2)


1



2



3



4



5



6




7



8



9



10



11



12

