






name: _____

date: _____

Sweet Symmetry

find each shape by drawing the other side.



what does "symmetry" mean?
