

Name: _____

Centimeters and Millimeters

Part 1: Complete the table.

centimeters	1	3	12	40	145
millimeters					

Part 2: Circle the greater length for each pair.

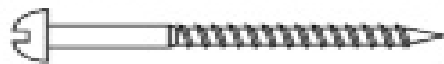
a. 4 cm 45 mm

b. 50 mm 6 cm

c. 800 cm 1,000 mm


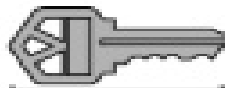
d. 3,200 mm 340 cm

Part 3: Measure to the nearest centimeter and/or nearest millimeter.



nearest cm = _____

nearest mm = _____



nearest cm = _____

nearest mm = _____