

Name: _____


CCSS Use addition to find the total number of objects arranged in rectangular arrays with up to 5 rows and up to 5 columns...

Repeated Addition Arrays

 Directions: Write an equation to solve the problems.


Bob the Baker needs help counting the cookies on each cookie sheet. Use repeated addition to write an equation to show how many cookies are on each cookie sheet. Circle columns of cookies.

Example:




$$3 + 3 + 3 = 9$$


1.




2.



3.



4.



____ I double checked my work.