

Name : _____

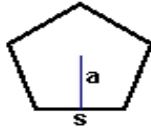
Score : _____

Teacher : _____

Date : _____

Identify and Calculate the Area and Perimeter for each Polygon.

1)



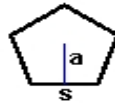
$s = 6.8 \text{ mm}$
 $a = 3.23 \text{ mm}$

Area: _____

Perimeter: _____

Type: _____

2)



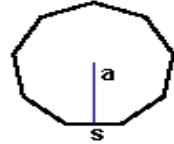
$s = 5.1 \text{ ft}$
 $a = 2.43 \text{ ft}$

Area: _____

Perimeter: _____

Type: _____

3)



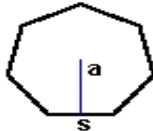
$s = 3.3 \text{ ft}$
 $a = 1.65 \text{ ft}$

Area: _____

Perimeter: _____

Type: _____

4)



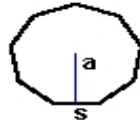
$s = 3.1 \text{ yds}$
 $a = 1.55 \text{ yds}$

Area: _____

Perimeter: _____

Type: _____

5)



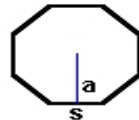
$s = 2.7 \text{ inches}$
 $a = 1.35 \text{ inches}$

Area: _____

Perimeter: _____

Type: _____

6)



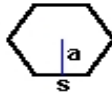
$s = 6 \text{ mm}$
 $a = 2.6 \text{ mm}$

Area: _____

Perimeter: _____

Type: _____

7)



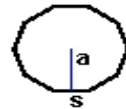
$s = 5 \text{ yds}$
 $a = 2.5 \text{ yds}$

Area: _____

Perimeter: _____

Type: _____

8)



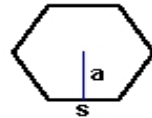
$s = 2.4 \text{ cm}$
 $a = 1.2 \text{ cm}$

Area: _____

Perimeter: _____

Type: _____

9)



$s = 6.7 \text{ inches}$
 $a = 3.35 \text{ inches}$

Area: _____

Perimeter: _____

Type: _____