


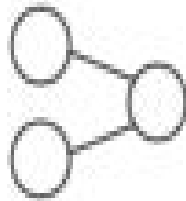
Name \_\_\_\_\_

### PRACTICE


Color some cubes in a row red and some blue. Complete each number bond. Then write an addition sentence.



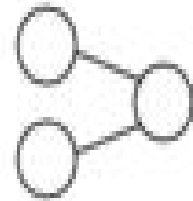
\_\_\_ + \_\_\_ = \_\_\_



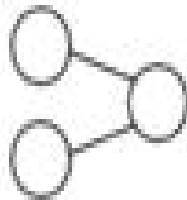
\_\_\_ + \_\_\_ = \_\_\_



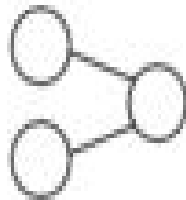
\_\_\_ + \_\_\_ = \_\_\_



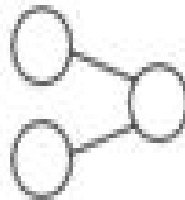
\_\_\_ + \_\_\_ = \_\_\_



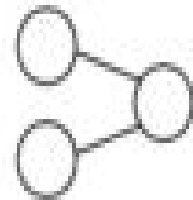
\_\_\_ + \_\_\_ = \_\_\_



\_\_\_ + \_\_\_ = \_\_\_



\_\_\_ + \_\_\_ = \_\_\_



\_\_\_ + \_\_\_ = \_\_\_