

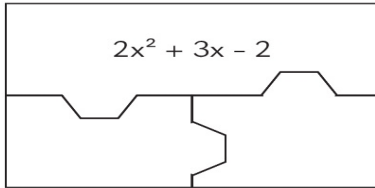
Factoring Trinomials Puzzle

Name:

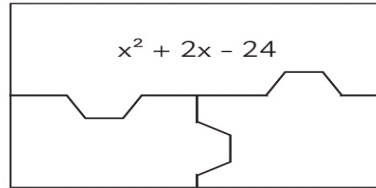
Date:

Factor each trinomial then color the shape. Write your answer inside the shape.

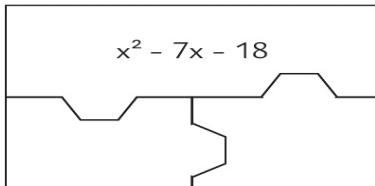
$2x^2 + 3x - 2$



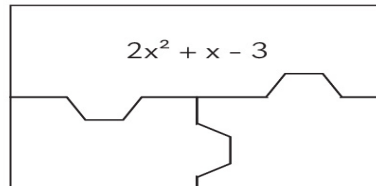
$x^2 + 2x - 24$



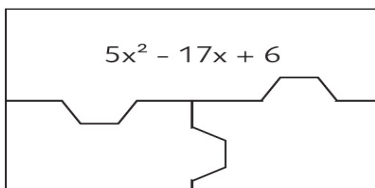
$x^2 - 7x - 18$



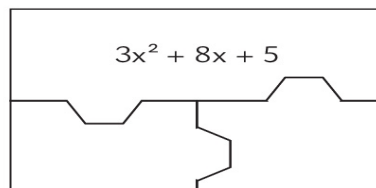
$2x^2 + x - 3$



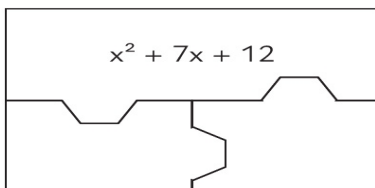
$5x^2 - 17x + 6$



$3x^2 + 8x + 5$



$x^2 + 7x + 12$



$x^2 - 14x + 49$

