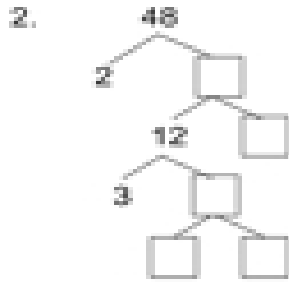


Name _____

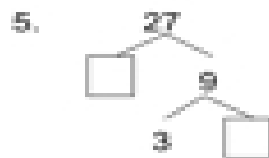
Factor Trees

Use factor trees to find prime factorization.

Complete the factor trees. Write the prime factorization on the line.



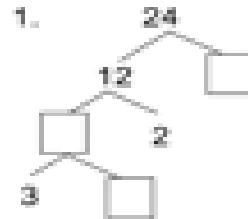
48 = _____



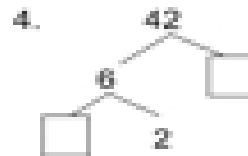
27 = _____



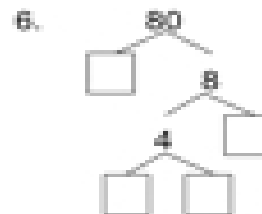
27 = _____



24 = _____



42 = _____



27 = _____