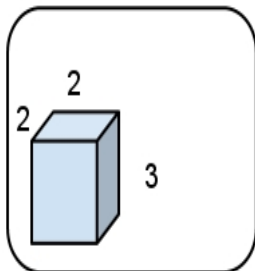


NAME: _____


Using the measurement tools given find the VOLUME of each item you find in the classroom.

VOLUME = side1 X side2 X side3


1. Object: _____
Units: _____
Side 1: _____
Side 2: _____
Side 3: _____
VOLUME: _____




4. Object: _____
Units: _____
Side 1: _____
Side 2: _____
Side 3: _____
VOLUME: _____




2. Object: _____
Units: _____
Side 1: _____
Side 2: _____
Side 3: _____
VOLUME: _____




5. Object: _____
Units: _____
Side 1: _____
Side 2: _____
Side 3: _____
VOLUME: _____



3. Object: _____
Units: _____
Side 1: _____
Side 2: _____
Side 3: _____
VOLUME: _____



6. Object: _____
Units: _____
Side 1: _____
Side 2: _____
Side 3: _____
VOLUME: _____



Object Ideas: desk, book shelf, art box, locker, book, calculator, your own idea. . .