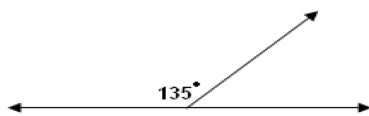


Student Name: _____

Score: _____

Supplementary Angles

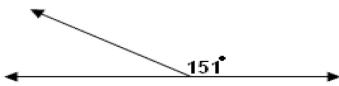
Find the missing angles in the following supplementary angles:



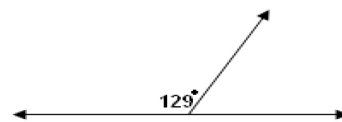
Answer: _____



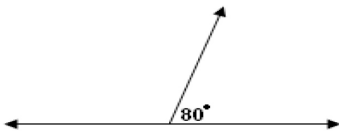
Answer: _____




Answer: _____



Answer: _____



Answer: _____



Answer: _____