



Ordering Numbers 1 through 10

Counting forward, write in the missing numerals. 


1	2			5
---	---	--	--	---

6				10
---	--	--	--	----

Counting backwards, write in the missing numerals. 

10				6
----	--	--	--	---

5				1
---	--	--	--	---

Counting forward, write in the missing numerals. 

1				
---	--	--	--	--

6				
---	--	--	--	--