


Name _____


Date _____

LET'S MAKE 10!


Draw more to make 10. Finish the addition equation.




$$5 + \underline{\quad} = 10$$



$$6 + \underline{\quad} = 10$$



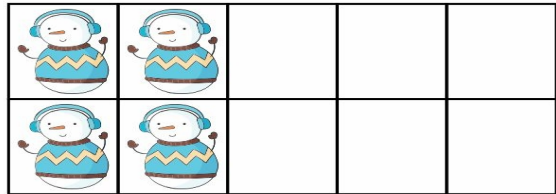
$$3 + \underline{\quad} = 10$$



$$7 + \underline{\quad} = 10$$



$$8 + \underline{\quad} = 10$$



$$4 + \underline{\quad} = 10$$