



Name: _____

Addition up to 20

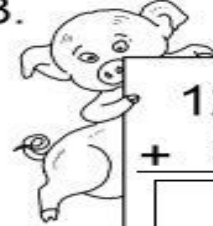
Add the numbers, and write the answer in the box.

1. 

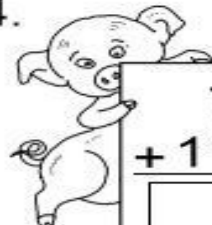
6
+ 13

2. 

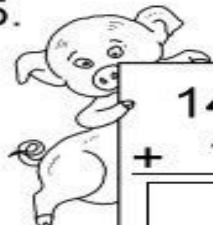
10
+ 10

3. 

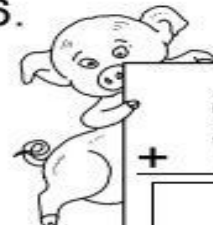
12
+ 5

4. 


7
+ 11

5. 


14
+ 1

6. 


8
+ 7

7. 

15
+ 3

8. 

2
+ 17

9. 

5
+ 10