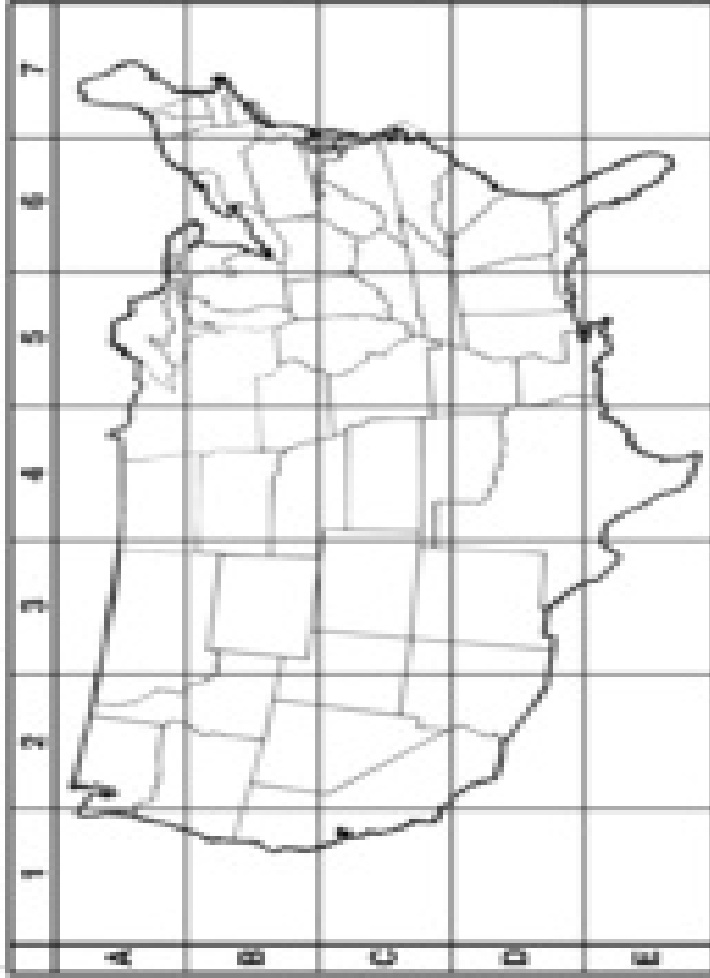


28 Name \_\_\_\_\_ Using a map grid





### A Great Grid





Cut out the boxes below.  
Glue each picture onto its correct coordinate.











Answer Box On the back of this sheet, write the coordinates for your locations.

City locations from a county atlas: Seattle

11  12  13  14 

15  16  17  18 

19  20  21  22 

23  24  25  26 

Write the number 1-26 from 1 to 26 in order of