

Name: _____
Geometry Worksheet After 5.4

Date: _____

Quadrilateral
A. Parallelogram

C. Rectangle
D. Rhombus

E. Square
F. Kite

G. Trapezoid
H. Isosceles Trapezoid

I. Write the letter of the figure from the list above that is best described by each definition given below.

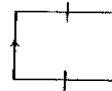
- _____ 1. A parallelogram with at least one right angle.
- _____ 2. A quadrilateral with exactly one pair of opposite sides parallel.
- _____ 3. A four-sided polygon.
- _____ 4. A quadrilateral in which two disjoint pairs of consecutive sides are congruent.
- _____ 5. A quadrilateral with both pairs of opposite sides parallel.
- _____ 6. A parallelogram with at least one pair of consecutive sides congruent.
- _____ 7. A trapezoid whose nonparallel sides are congruent.
- _____ 8. A parallelogram that is both a rectangle and rhombus.

II. Using the tick marks to assist you, select the letter of the figure from the list above that gives the most descriptive name.

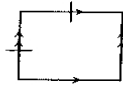
9. _____



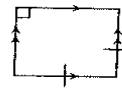
13. _____



10. _____



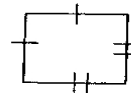
14. _____



11. _____



15. _____



12. _____



16. _____

