

Name : _____

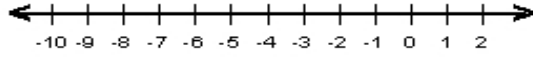
Score : _____

Teacher : _____

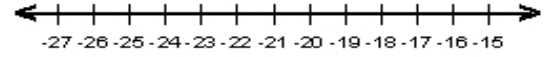
Date : _____

Solve the Inequalities

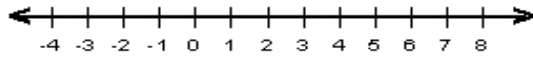
1) $-5 + \frac{a}{4} \leq -7$



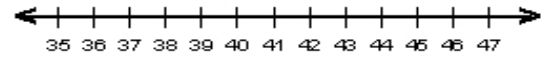
6) $-7 > 3 + \frac{g}{2}$



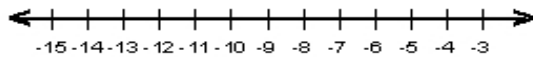
2) $2d + 5 < 15$



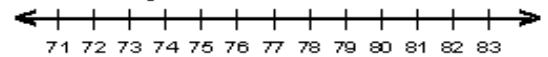
7) $7 < -6 + \frac{x}{3}$



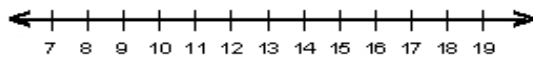
3) $20 \geq 5 - 3r$



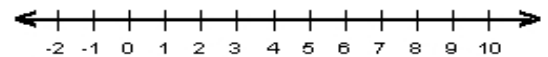
8) $-6 + \frac{5t}{6} \geq 10$



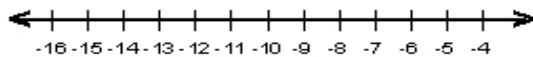
4) $3 + 6f > 69$



9) $2c + 4 \leq 14$



5) $61 \leq -5k + 6$



10) $-8 < -2n + 4$

