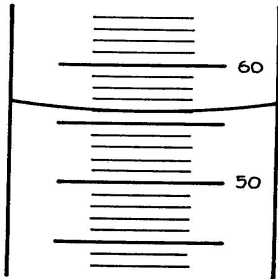


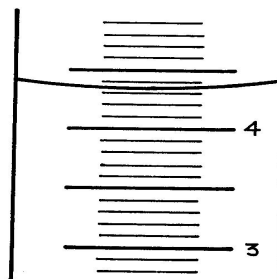
# MEASURING LIQUID VOLUME

Name \_\_\_\_\_

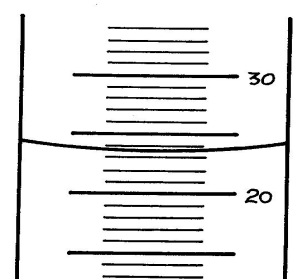
What volume is indicated on each of the graduated cylinders below? The unit of volume is mL.



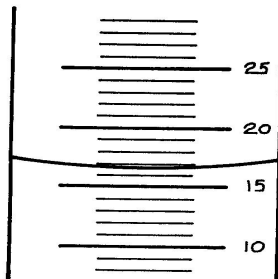
a) \_\_\_\_\_



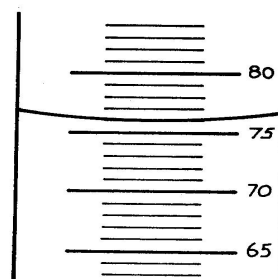
b) \_\_\_\_\_



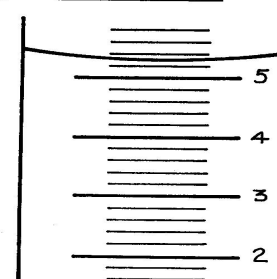
c) \_\_\_\_\_



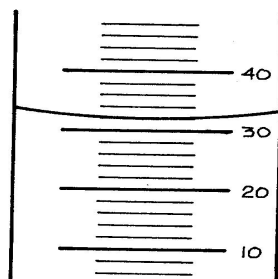
d) \_\_\_\_\_



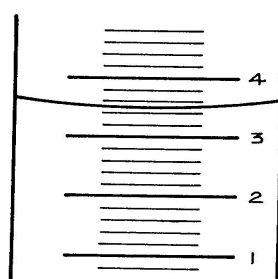
e) \_\_\_\_\_



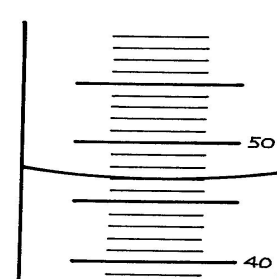
f) \_\_\_\_\_



g) \_\_\_\_\_



h) \_\_\_\_\_



i) \_\_\_\_\_