

Name _____

Date _____

Electricity at Work


Electricity can provide light, heat, or mechanical energy. Draw the symbol under each object to show which kind or kinds of energy it uses.



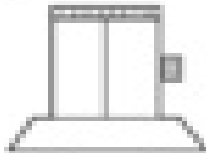
1.



2.




3.



4.



5.




6.



7.



8.



9.



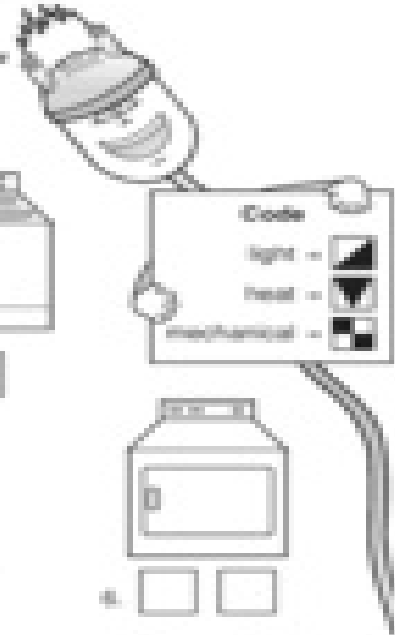
10.



11.



12.



Bonus Box: Name five additional objects in which electricity provides light, heat, or mechanical energy.