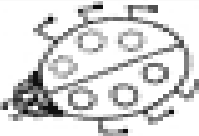



Spot the doubles




Draw the missing spots and write the numbers.


$$3 + \boxed{3} = \boxed{6}$$


double 3 is


$$4 + \boxed{} = \boxed{}$$


double 4 is


$$1 + \boxed{} = \boxed{}$$


double 1 is


$$2 + \boxed{} = \boxed{}$$


double 2 is


$$6 + \boxed{} = \boxed{}$$


double 6 is


$$5 + \boxed{} = \boxed{}$$

double 5 is


$$7 + \boxed{} = \boxed{}$$

double 7 is


$$10 + \boxed{} = \boxed{}$$

double 10 is