

# Ordering



Find the totals.











Write the totals in order, greatest first.

1st


2nd

3rd


4th

5th


Find the totals.











Write the totals in order, smallest first.

1st

2nd

3rd

4th

5th