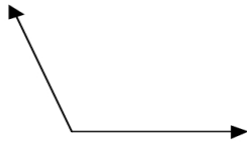




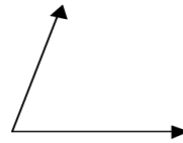
**TYPES OF ANGLES WORKSHEET**

**Directions** State whether each angle shown appears to be acute, obtuse, right, or straight.

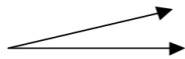
1.



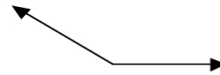
2.



3.



4.



5.



6.

