





**Secant-Tangent and Tangent-Tangent Angles**

Find the measure of the arc or angle indicated. Assume that lines which appear tangent are tangent.



Subtract  $x$ . Assume that lines which appear tangent are tangent.

