









Subtract Groups of Pets

Name _____

Subtract the groups of pets and write the answers.

 5	-	 5	=	<input style="width: 50px; height: 50px;" type="text"/>
 6	-	 5	=	<input style="width: 50px; height: 50px;" type="text"/>
 6	-	 1	=	<input style="width: 50px; height: 50px;" type="text"/>
 6	-	 6	=	<input style="width: 50px; height: 50px;" type="text"/>