

Name : _____

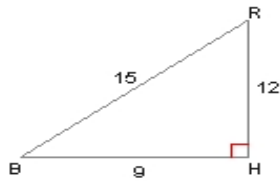
Score : _____

Teacher : _____

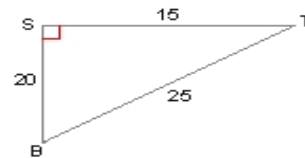
Date : _____

Trigonometric Ratios

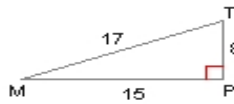
1) $\tan B =$ _____



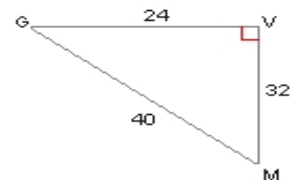
2) $\cos B =$ _____



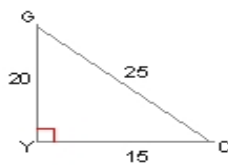
3) $\tan M =$ _____



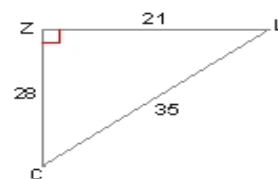
4) $\sin G =$ _____



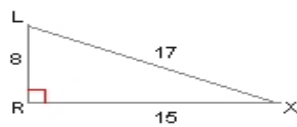
5) $\tan G =$ _____



6) $\cos C =$ _____



7) $\tan X =$ _____



8) $\sin O =$ _____

