

Name: \_\_\_\_\_  
Geometry Worksheet After 5.4

Date: \_\_\_\_\_

Quadrilateral  
B. Parallelogram

C. Rectangle  
D. Rhombus

E. Square  
F. Kite

G. Trapezoid  
H. Isosceles Trapezoid

I. Write the letter of the figure from the list above that is best described by each definition given below.

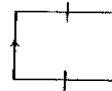
- \_\_\_\_\_ 1. A parallelogram with at least one right angle.
- \_\_\_\_\_ 2. A quadrilateral with exactly one pair of opposite sides parallel.
- \_\_\_\_\_ 3. A four-sided polygon.
- \_\_\_\_\_ 4. A quadrilateral in which two disjoint pairs of consecutive sides are congruent.
- \_\_\_\_\_ 5. A quadrilateral with both pairs of opposite sides parallel.
- \_\_\_\_\_ 6. A parallelogram with at least one pair of consecutive sides congruent.
- \_\_\_\_\_ 7. A trapezoid whose nonparallel sides are congruent.
- \_\_\_\_\_ 8. A parallelogram that is both a rectangle and rhombus.

II. Using the tick marks to assist you, select the letter of the figure from the list above that gives the most descriptive name.

9. \_\_\_\_\_



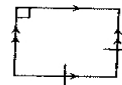
13. \_\_\_\_\_



10. \_\_\_\_\_



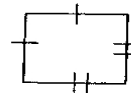
14. \_\_\_\_\_



11. \_\_\_\_\_



15. \_\_\_\_\_



12. \_\_\_\_\_



16. \_\_\_\_\_

