



What time is it?


Draw the hands and write the time




03:20




12:50




10:55




12:15




11:35




11:30



10:15



09:45



03:35

1. It is twenty past three.

6. _____

2. _____

7. _____

3. _____

8. _____

4. _____

9. _____

5. _____