

Name _____

CCSS 3.OA.3 Use multiplication and division within 100 to solve

Multiplication Picture Array


⇒ Circle the problem shown by the picture array.



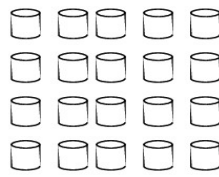
$4 \times 5 = 20$
 $6 \times 3 = 18$
 $4 \times 6 = 24$




$2 \times 7 = 15$
 $2 \times 7 = 14$
 $7 \times 2 = 18$



$6 \times 3 = 18$
 $6 \times 5 = 30$
 $5 \times 3 = 15$



$4 \times 5 = 20$
 $5 \times 5 = 25$
 $5 \times 5 = 20$



$3 \times 4 = 12$
 $3 \times 3 = 9$
 $3 \times 3 = 12$



$5 \times 7 = 28$
 $8 \times 4 = 30$
 $5 \times 8 = 40$