

## Phases of the Moon - Matching

Write in the correct name for each phase of the moon using the names provided on the right.




1. \_\_\_\_\_

full moon



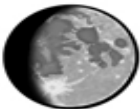
2. \_\_\_\_\_

new moon



3. \_\_\_\_\_

waxing crescent



4. \_\_\_\_\_

waning crescent




5. \_\_\_\_\_

first quarter



6. \_\_\_\_\_

last quarter



7. \_\_\_\_\_

waxing gibbous



8. \_\_\_\_\_

waning gibbous