

Counting by 10s



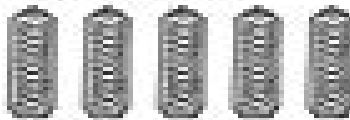
Use this number line to help you.



How many candies? Count, say, and write.





thirty

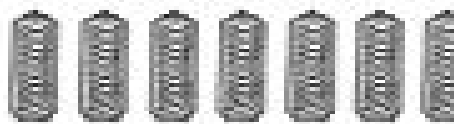




eighty







Put the numbers in the right order.

80 60 100 50 20 70 90 30 40 80

10 20

Greatest first

100 90 80