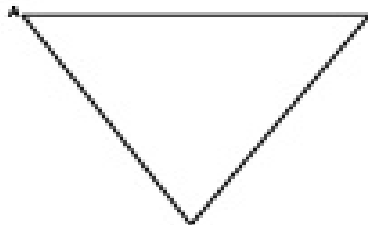


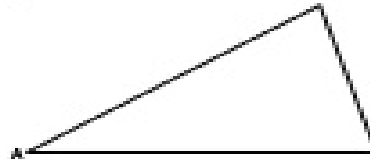
**Medians of Triangles Constructions**

For each triangle, construct the median from vertex A.

1)




2)



Locate the centroid of each triangle.

3)



4)

