

# HOW MANY SIDES?

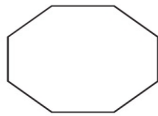
Name: \_\_\_\_\_

Date: \_\_\_\_\_

Count the sides of each shape and color the correct number.



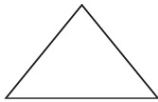
10   6   8



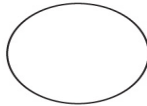
6   8   9



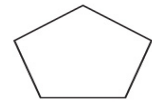
2   6   4



5   3   2



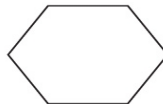
0   2   1



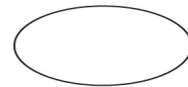
7   5   6



0   6   4



4   6   8



3   2   0