

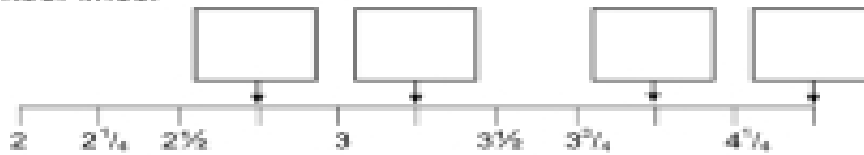
### Counting in quarters



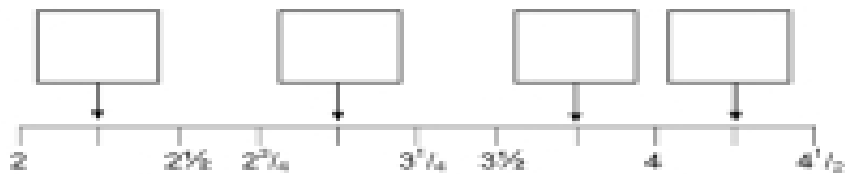
Look at the number line above.  
See how easy it is to count in quarters.

Now try and write what numbers the arrows are pointing at on these number lines:

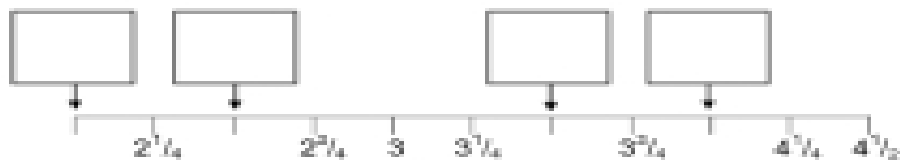
1.



2.



3.



Name: \_\_\_\_\_