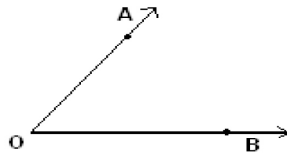


Student Name: _____

Score: _____

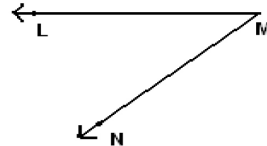
Vertex and Sides Formed by Angles

Name the vertex and sides formed by the angles:



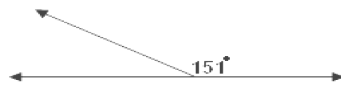
Vertex: _____

Sides: _____

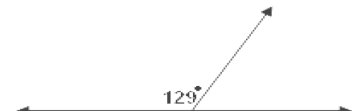


Vertex: _____

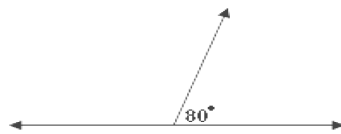
Sides: _____




Answer: _____



Answer: _____



Answer: _____



Answer: _____