

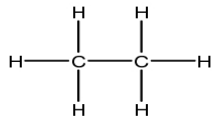
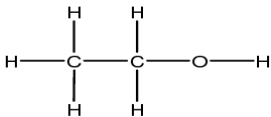
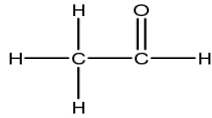
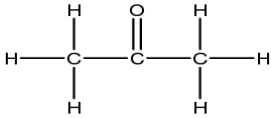
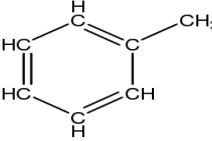
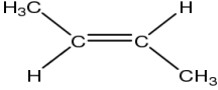
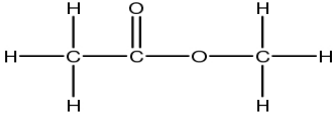
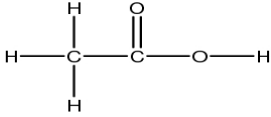
Name _____

Period _____

Alkane Functional Groups – Worksheet #1

Classify the following compounds according to their functional group(s). You do not need to name the compounds. Choose from the following list:

Alcohol, Aldehyde, Alkane, Alkene, Alkyne, Amine, Aromatic, Carboxylic Acid, Ester, Ether, or Ketone

 <p>1. _____</p>	 <p>2. _____</p>
 <p>3. _____</p>	 <p>4. _____</p>
 <p>5. _____</p>	 <p>6. _____</p>
 <p>7. _____</p>	 <p>8. _____</p>