
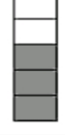

























Name: _____

Fraction Practice

Directions: Write the fraction to match each picture.

 —	 —	 —	 —	 —
 —	 —	 —	 —	 —
 —	 —	 —	 —	 —
 —	 —	 —	 —	 —
 —	 —	 —	 —	 —