





Name \_\_\_\_\_



# Dice Addition



Look at the two dice. Add the numbers together. Write the number that tells how many.



 and  \_\_\_\_\_



 and  \_\_\_\_\_



 and  \_\_\_\_\_



 and  \_\_\_\_\_



 and  \_\_\_\_\_

 and  \_\_\_\_\_



 and  \_\_\_\_\_

 and  \_\_\_\_\_



 and  \_\_\_\_\_

 and  \_\_\_\_\_

 and  \_\_\_\_\_

 and  \_\_\_\_\_

 and  \_\_\_\_\_

 and  \_\_\_\_\_