

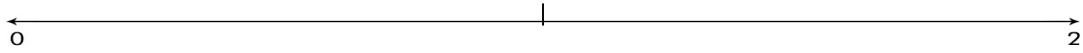
Name: _____

Date: _____

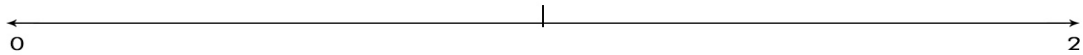
Decimal Numbers

Identify where each set of points should be placed on the number lines below.

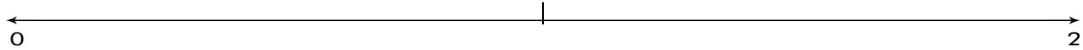
1. 1.7 1.1 1.4 0.3



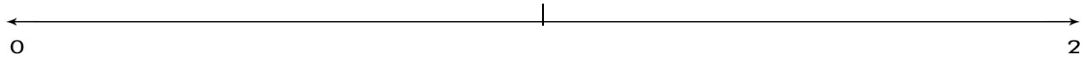
2. 1.3 0.5 1.8 1.5



3. 1.4 0.3 1.1 0.5



4. 1.7 0.7 0.5 1.1



5. 0.9 0.5 1.8 1.5

