










NAME: \_\_\_\_\_

# DOMINO NUMBER SENTENCES

Directions: Look at both sides of the domino. Write a number sentence that tells about the domino.

|  |  |  |
|--|--|--|
| <br>$1 + 1 = 2$ | <br>_____ | <br>_____ |
|--|--|--|

|  |  |  |
|--|--|--|
| <br>_____ | <br>_____ | <br>_____ |
|--|--|--|

|  |  |  |
|--|--|--|
| <br>_____ | <br>_____ | <br>_____ |
|--|--|--|

Bonus: Show your own number sentence on the back!