





Name _____

CCSS 3.OA.3 Use multiplication and division within 100 to solve

Multiplication Arrays

⇒ How many cookies are there? Circle the multiplication problem illustrated in the picture.

| | | |
|---|--------------------|--------------------|
|  | $2 \times 10 = 20$ | $3 \times 5 = 15$ |
| | $3 \times 6 = 15$ | $4 \times 6 = 24$ |
|  | $2 \times 8 = 16$ | $4 \times 6 = 24$ |
| | $4 \times 4 = 16$ | $5 \times 4 = 16$ |
|  | $6 \times 9 = 42$ | $4 \times 4 = 16$ |
| | $7 \times 6 = 42$ | $6 \times 6 = 36$ |
|  | $3 \times 3 = 9$ | $2 \times 10 = 20$ |
| | $2 \times 5 = 10$ | $5 \times 3 = 15$ |